
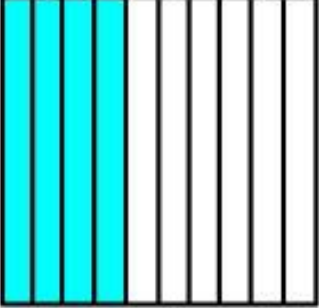






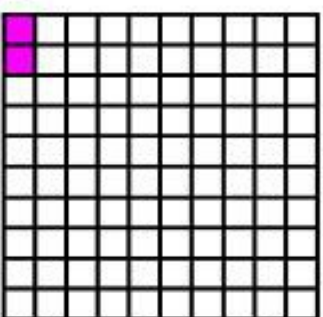


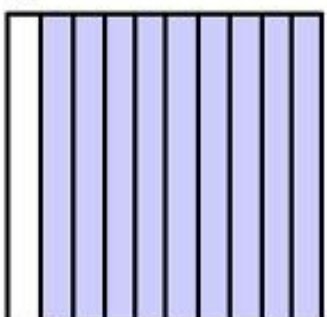


Name: _____

Decimals: Hundredths and Tenths

Write the decimal and the fraction of each shaded part.


<p>a.</p>  <p>_____</p>	<p>b.</p>  <p>_____</p>	<p>c.</p>  <p>_____</p>	<p>d.</p>  <p>_____</p>
<p>e.</p>  <p>_____</p>	<p>f.</p>  <p>_____</p>	<p>g.</p>  <p>_____</p>	<p>h.</p>  <p>_____</p>
<p>i.</p>  <p>_____</p>	<p>j.</p>  <p>_____</p>	<p>k.</p>  <p>_____</p>	<p>l.</p>  <p>_____</p>

ANSWER KEY

Decimals: Hundredths and Tenths


Write the decimal and the fraction of each shaded part.

a.




0.26 26/100

b.




0.4 4/10

c.




0.45 45/100

d.




0.1 1/10

e.




0.59 59/100

f.




0.31 31/100

g.




0.8 8/10

h.




0.20 20/100

i.




0.02 2/100

j.




0.85 85/100

k.



0.77 77/100

l.



0.9 9/10